










Snooker Pot Shots

The Learning Centre



Snooker Balls have the following values

Red	Yellow	Green	Brown	Blue	Pink	Black
						
1	2	3	4	5	6	7

Find the scores



For example Freddie pots Red and Yellow

What did he score ? $1 + 2 = 3$

Try these

1. Freddie pots Red Yellow Red Green

$$\square + \square + \square + \square = \square$$

2. Mandy pots Red Yellow Red Pink

$$\square + \square + \square + \square = \square$$

3. Freddie pots Red Brown Red Yellow Red

$$\square + \square + \square + \square + \square = \square$$

4. Mandy Pots Red Green Red Blue Red Pink

$$\square + \square + \square + \square + \square + \square = \square$$

Who is winning so far and what is their score?