










# Snooker Pot Shots 2

*The Learning Centre*




## Snooker Balls have the following values

|   |   |   |   |   |   |   |
|---|---|---|---|---|---|---|
| Red   | Yellow  | Green   | Brown   | Blue  | Pink  | Black   |
|  |  |  |  |  |  |  |
| 1   | 2   | 3   | 4   | 5   | 6   | 7   |

But if you pot the White by accident 4 points go to your opponent

Find these scores so far

Bobby pots



Red Blue Red

Nina pots



Red Pink

Bobby pots the White at the end of his next turn. Oops!

Bobby pots



Red Green Red White (!)

Nina gets 4 Points

Nina pots



Red Blue Red Green

What is Nina's score so far?

How many Red balls are left on the Table if they started with 15?

