















Name.....

Course: Everyday Numeracy

WHAT TIME IS IT?

When the little hand of the clock is on 9 and the big hand is on 12 the time is 9 o'clock. Look at all the clocks and see where the big and little hands are. Draw a line from the time in the centre column to match the correct time on the clock. The first one has been done for you.

	4 o'clock	
	1 o'clock	
	7 o'clock	
	11 o'clock	
	9 o'clock	
	5 o'clock	
	6 o'clock	
	10 o'clock	
	8 o'clock	
	3 o'clock	
	12 o'clock	
	2 o'clock	